
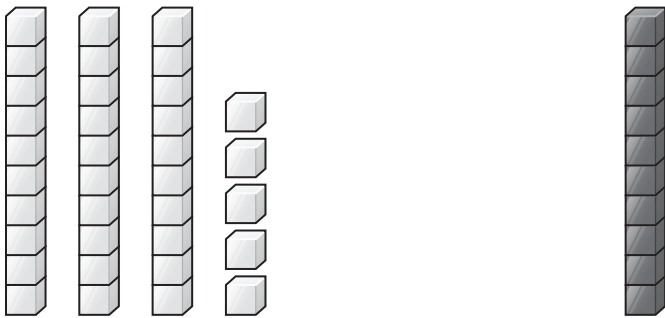


Name _____

Look at the Example. Then solve.**Example** What is 21 and 10 more?

2 tens 1 one and 1 ten = 3 tens 1 one
 21 and 10 more is 31.

1 What is 10 more than 35?

3 tens ones + ten = tens ones
 is 10 more than 35.

2 What changes when you add 1 ten to 35? Circle.

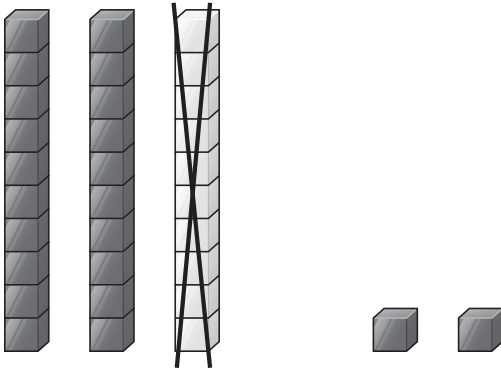
the number of tens

the number of ones




3 What is 10 less than 32?

Fill in the blank.



2 tens 2 ones _____ is 10 less than 32.

4 What is 10 less than 57?



_____ tens _____ ones _____ is 10 less than 57.

5 What does NOT change when you subtract 10 from 57? Circle.

the number of tens

the number of ones

Name _____

Look at the Example. Then solve.**Example** Find 10 less than 86. Color both numbers.76 is 10 less than 86.

71	72	73	74	75	76	77	78	79	80
81	82	83	84	85	86	87	88	89	90
91	92	93	94	95	96	97	98	99	100

1 Find 10 more than 48.

Color both numbers.

_____ is 10 more than 48.

2 Find 10 less than 43.

Color both numbers.

_____ is 10 less than 43.

31	32	33	34	35	36	37	38	39	40
41	42	43	44	45	46	47	48	49	50
51	52	53	54	55	56	57	58	59	60

3 Fill in the blanks. Use the charts above.

_____ is 10 less than _____. _____ is 10 more than _____.



4 Find 10 less than 57.

_____ is 10 less than 57.

5 Find 10 more than 53.

_____ is 10 more than 53.

41	42	43	44	45	46	47	48	49	50
51	52	53	54	55	56	57	58	59	60
61	62	63	64	65	66	67	68	69	70

6 Find 10 more than 81.

_____ is 10 more than 81.

7 Find 10 less than 90.

_____ is 10 less than 90.

71	72	73	74	75	76	77	78	79	80
81	82	83	84	85	86	87	88	89	90
91	92	93	94	95	96	97	98	99	100

8 Fill in the blanks. Use the charts above.

_____ is 10 more than 46.

_____ is 10 more than 84.

Name _____

Look at the Example. Then solve.**Example** What is 10 more than 108?

91	92	93	94	95	96	97	98	99	100
101	102	103	104	105	106	107	108	109	110
111	112	113	114	115	116	117	118	119	120

10 more than 108 is 118.

- 1 Identify** What is 10 less than 105? What is 10 more than 105? Use the chart above.

10 less than 105 is _____.

10 more than 105 is _____.

- 2 Reason** Look for a pattern. Write the missing numbers.

59, 69, 79, _____, _____, _____

61	62	63	64	65	66	67	68	69	70
71	72	73	74	75	76	77	78	79	80
81	82	83	84	85	86	87	88	89	90



3 Choose Fill in the blanks. Use the numbers in the box.

_____ is 10 more than 77.

_____ is 10 less than 77.

_____ is 10 more than 107.

_____ is 10 less than 107.

67

87

117

97

4 Draw Show that 32 is 10 more than 22.

5 Evaluate Boom says that 114 is 10 more than 104.
Buzz says that 115 is 10 more than 114.
Who is correct? Circle.

Boom

Buzz